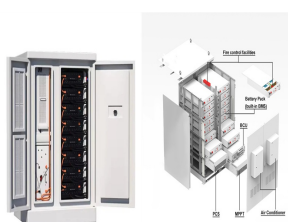


# RLC WHO IS THE ENERGY STORAGE ELEMENT



It is a significant and longstanding puzzle that the resistor, inductor, capacitor (RLC) networks obtained by the established RLC realization procedures appear highly non-minimal from the perspective of linear systems theory. Specifically, each of these networks contains significantly more energy storage elements than the McMillan degree of its ???



Integrating two fundamental energy storage elements in electrical circuits results in second-order circuits, encompassing RLC circuits and circuits with dual capacitors or inductors (RC and RL circuits). Second-order circuits are identified by second-order differential equations that link input and output signals.



of two energy storage elements. There are two basic types of RLC circuits: parallel connected and series connected. 8.1 Introduction to the Natural Response of a Parallel RLC Circuit . CIEN346 Electric Circuits Nam Ki Min 010-9419-2320 nkmin@korea.ac.kr Chapter 8



In RLC circuits, both energy storage elements are present. This, as we will shortly show, results in second-order differential equations with two unknown constants. To determine these constants will now require two known, independent initial conditions. These equations, once obtained, determine the behavior of current  $i$  and voltage  $v$  in RLC



RLC circuits have at least one resistor and two energy storage elements, i.e., one capacitor and one inductor. If this circuit has no resistor, it is called as lossless. Example 3.23. Analyze the parallel RLC circuit in Fig. 3.40.

# RLC WHO IS THE ENERGY STORAGE ELEMENT




Each RPFG network contains more than twice as many energy storage elements as the McMillan degree of its impedance, yet it has never been established if all of these energy storage elements are necessary. In this paper, we present some newly discovered alternatives to the RPFG ???




The energy storage elements are used to improve the efficiency and reliability of the main electrical system [104]. Among the different devices of energy storage, battery is the most widely used dispositive for storing electrical energy [105,106]. The lead acid battery is considered as a storage device in the studied system.



It consists of resistors and the equivalent of two energy storage element (i.e. different elements, or the elements can not be represented with a single equivalent element) Click the card to flip ??? Natural response of RLC circuit.  $i(t) = A e^{s_1 t} + A e^{s_2 t}$  Overdamped.



The energy  $e(t)$  consumed by it during the time interval from 0 to  $t$  is given by  $e(t) = \int_0^t p(t) dt = \frac{1}{2} L i^2(t) - \frac{1}{2} L i^2(0) = \frac{1}{2} L i^2(t) - \frac{1}{2} L i^2(0)$  [1]  $\cos(2\omega t) = \frac{1}{2} L i^2(t) \sin 2(\omega t) = \frac{1}{2} L i^2(t)$ . 0 2 4 6 8 10 12 ??? 2 ??? 1 0 1 2 Current, Voltage, Power, and Energy associated with an Inductance Time  $t$  Current Power Voltage Energy Thw above



**SERIES RLC Circuit OBJECTIVE:** To study the behavior of a series R-L-C circuit. **PROCEDURE :** 1. Connect the circuit as shown in the diagram. 2. Adjust the rheostat for maximum resistance and the auto transformer to the position of zero-output voltage and switch on the supply. 3.

# RLC WHO IS THE ENERGY STORAGE ELEMENT



Request PDF | Why RLC Realizations of Certain Impedances Need Many More Energy Storage Elements Than Expected | It is a significant and longstanding puzzle that the resistor, inductor, capacitor



At  $t = 0$ , the charge stored on the capacitor plates is maximum in an oscillating series RLC circuit. At what time will the maximum possible energy that can be stored in the capacitor fall to one-eighth of its initial value if  $R=7.20 \text{ } \Omega$  and  $L=17.5$  Is it possible to have a voltage drop across the energy storage element greater than



for RLC circuits with dc sources are: 1. Replace capacitances with open circuits. 2. Replace inductances with short circuits. 3. energy-storage element (inductance or capacitance) are: 1. Apply Kirchhoff's current and voltage laws to write the circuit equation. 2. If the equation contains integrals, differentiate each term in the equation



A 2nd Order RLC Circuit incorporate two energy storage elements. An RLC electrical circuit consisting of a resistor ( $R$ ), an inductor ( $L$ ), and a capacitor ( $C$ ) arranged either in series or in parallel. The circuit's name originates from the letters used to its constituent the three components. These circuits are described by a second-order



We then prove that the RPFNG networks, and these newly discovered networks, contain the least possible number of energy storage elements for realizing certain positive-real functions. In other words, all RLC networks which realize certain impedances contain more than twice the expected number (McMillan degree) of energy storage elements. PDF

# RLC WHO IS THE ENERGY STORAGE ELEMENT



Careers Kickstart Your Career Our internship program is designed to give you more than just a glimpse into the industry. You'll gain hands-on experience, work with experienced professionals, and have access to career-building opportunities. Whether you're looking to enhance your skills or explore a future full-time role, this is where your career journey begins. Hear [???



OverviewBasic conceptsSeries circuitParallel circuitOther configurationsHistoryApplicationsSee also



Because they comprise two energy storage elements, an inductance  $L$  and a capacitance  $C$ , series RLC circuits are classified as second-order circuits. Take a look at the RLC circuit below. Series RLC Circuit Series RLC Circuits (Reference: electronics-tutorials.ws)



These two distinct energy storage mechanisms are represented in electric circuits by two ideal circuit elements: the ideal capacitor and the ideal inductor, which approximate the behavior of actual discrete capacitors and inductors. They also approximate the bulk properties of capacitance and inductance that are present in any physical system.



Instead of analysing each passive element separately, we can combine all three together into a series RLC circuit. The analysis of a series RLC circuit is the same as that for the dual series  $R L$  and  $R C$  circuits we looked at previously, except this time we need to take into account the magnitudes of both  $X L$  and  $X C$  to find the overall circuit reactance. . Series RLC circuits are ???

# RLC WHO IS THE ENERGY STORAGE ELEMENT



**Parallel RLC Circuit** The RLC circuit shown on Figure 6 is called the parallel RLC circuit. It is driven by the DC current source  $I_s$  whose time evolution is shown on Figure 7.  $I_s$  R L C  $i_L(t)$   $v$   $+i_R(t)$   $i_C(t)$  Figure 6  $t$   $I_s$  0 Figure 7 Our goal is to determine the current  $i_L(t)$  and the voltage  $v(t)$  for  $t > 0$ . We proceed as follows: 1.



Element Energy is an advanced battery management technology company founded in 2019 and headquartered in Menlo Park, California. We utilize proprietary hardware and software algorithms to improve the safety, intelligence, and economics of ???



the equivalent of two energy storage elements and is characterized by a second-order differential equation. ??? The behavior of such RLC network is captured by the idea of damping, which is the gradual loss of the initial stored energy, evidenced by the continuous



**Energy Storage Elements** (a)  $3v$   $v$   $J$  (b)  $\sim t(S)$   $o$   $2$   $4$   $i$   $4.5$  (C)  $---$   $---$   $r$   $---$   $t$  (5)  $-4.5$  Figure 4.3 Figure for worked example 4.2.1. 4.3 Energy stored in capacitor 81 Energy is stored in the electric field of the capacitor, and the instantaneous energy supplied to a capacitor of capacitance  $C$  in time  $dt$  is  $dW = P dt = v i dt = v C dv dt = C v dv dt$



**CHAPTER 7 Energy Storage Elements.** IN THIS CHAPTER. 7.1 Introduction. 7.2 Capacitors. 7.3 Energy Storage in a Capacitor. 7.4 Series and Parallel Capacitors. 7.5 Inductors. 7.6 Energy Storage in an Inductor. 7.7 Series and Parallel Inductors. 7.8 Initial Conditions of Switched Circuits. 7.9 Operational Amplifier Circuits and Linear Differential Equations. 7.10 Using ???

# RLC WHO IS THE ENERGY STORAGE ELEMENT



??? Resonance occurs in any circuit that has energy storage elements, at least one inductor and one capacitor. ??? Under resonance, the total impedance is equal to the resistance only and maximum power is drawn from the supply by the circuit. ??? Under resonance, the total supply voltage and supply current are in phase.



A couple of suggestions: (1) the EE stackexchange site a better home for this question (2) simply solve for the voltage across the capacitor and the current through the inductor. Once you have those, the energies stored, as a function of time are just



path of elements between the driving-point terminals of the network [24], in which case  $Z$  is PR, and the number of energy storage elements in the network is greater than or equal to the McMillan degree of  $Z$ [25]. As emphasised in [6], [8], [24], certain RLC networks contain more energy storage elements than the McMillan degree of their impedance.