

# WHOSE ENERGY STORAGE COMPONENT IS RLC



What is an RLC circuit? An RLC electrical circuit consisting of a resistor (R), an inductor (L), and a capacitor (C) arranged either in series or in parallel. The circuit's name originates from the letters used to its constituent the three components. These circuits are described by a second-order differential equation.



Is RLC a second-order circuit? The RLC filter is described as a second-order circuit, meaning that any voltage or current in the circuit can be described by a second-order differential equation in circuit analysis. The three circuit elements, R, L and C, can be combined in a number of different topologies.



What is the resonant frequency of a RLC circuit? This is exactly the same as the resonance frequency of a lossless LC circuit that is, one with no resistor present. The resonant frequency for a driven RLC circuit is the same as a circuit in which there is no damping, hence undamped resonant frequency.



What are RLC resonators? RLC resonators typically consist of a resistor R, inductor L, and capacitor C connected in series or parallel, as illustrated in Figure 3.5.1. RLC resonators are of interest because they behave much like other electromagnetic systems that store both electric and magnetic energy, which slowly dissipates due to resistive losses.



Can an overdamped RLC circuit be used as a pulse discharge circuit? Even though the circuit appears as high impedance to the external source, there is a large current circulating in the internal loop of the parallel inductor and capacitor. An overdamped series RLC circuit can be used as a pulse discharge circuit. Often it is useful to know the values of components that could be used to produce a waveform.

# WHOSE ENERGY STORAGE COMPONENT IS RLC



What happens if there is no power source in an RLC circuit? Friction will slowly bring any oscillation to a halt if there is no external force driving it. Likewise, the resistance in an RLC circuit will "damp" the oscillation, diminishing it with time if there is no driving AC power source in the circuit.



Because they comprise two energy storage elements, an inductance  $L$  and a capacitance  $C$ , series RLC circuits are classified as second-order circuits.  $V_R$ ,  $V_L$ , and  $V_C$ , make up the amplitude of the source voltage across all three components in a series RLC circuit, with the current common to all three components. The current vector will be



Figure 1 Marginal Cost Energy Offers For Storage ??? Adding the Recovery of Capital Costs in Storage Energy Offers. If a storage owner only offers and is paid for its marginal costs, it will never recover any of the so-called "missing money" required to pay for the fixed operating and capital costs required to build and maintain the asset.




1. Explain the purpose and function of each component in an RLC circuit: resistor, inductor, and capacitor: In an RLC circuit, there are 3 main components, resistor, inductor and capacitor, and they all serve different roles. The resistor regulates current, dissipating energy as heat, applicable to both AC and DC currents and influences the circuit's time constant.




Overview Basic concepts Series circuit Parallel circuit Other configurations History Applications See also

# WHOSE ENERGY STORAGE COMPONENT IS RLC



It is proved that the RPFG networks, and these newly discovered networks, contain the least possible number of energy storage elements for realizing certain positive-real functions. It is a significant and longstanding puzzle that the resistor, inductor, and capacitor (RLC) networks obtained by the established RLC realization procedures appear highly nonminimal from the ???



In other words, these components of a battery energy storage system ensure the whole system works as it should to produce electrical power as needed. Thermal Management System. With current flowing in its circuits, an energy storage system will undoubtedly heat up. If the heating were to go unchecked, temperatures could reach ???



Abstract: It is a significant and longstanding puzzle that the resistor, inductor, and capacitor (RLC) networks obtained by the established RLC realization procedures appear highly nonminimal from the perspective of the linear systems theory. Specifically, each of these networks contains significantly more energy storage elements than the McMillan degree of its impedance, and ???



All three components are connected in series with an electromotive force or alternating current (AC) source of energy. RLC series circuit is the same as saying an RLC circuit. In an RLC circuit



The energy  $e(t)$  consumed by it during the time interval from 0 to  $t$  is given by  $e(t) = \int_0^t p(t) dt = \frac{1}{2} L I_m^2 \sin^2(\omega t) = \frac{1}{4} L I_m^2 [1 - \cos(2\omega t)] = \frac{1}{2} L I_m^2 \sin^2(\omega t) = \frac{1}{2} L I_m^2$ .  
 0 2 4 6 8 10 12 ???  
 ??? 1 0 1 2 Current, Voltage, Power, and Energy associated with an Inductance Time  $t$  Current Power Voltage Energy Thw above

# WHOSE ENERGY STORAGE COMPONENT IS RLC



Yes. If a series LC circuit is placed across a constant AC voltage supply there can be a magnification factor. If the circuit is resonant the L and C have equal reactance at the supply frequency



Battery Energy Storage Systems (BESS) play a fundamental role in energy management, providing solutions for renewable energy integration, grid stability, and peak demand management. In order to effectively run and get the most out of BESS, we must understand its key components and how they impact the system's efficiency and reliability. ???



The operation of the electricity network has grown more complex due to the increased adoption of renewable energy resources, such as wind and solar power. Using energy storage technology can improve the stability and quality of the power grid. One such technology is flywheel energy storage systems (FESSs). Compared with other energy storage systems, ???



Power delivered to an RLC series AC circuit is dissipated by the resistance alone. The inductor and capacitor have energy input and output but do not dissipate it out of the circuit. Rather they transfer energy back and forth to one another, with the resistor dissipating exactly what the voltage source puts into the circuit.



Example 1: Calculating Impedance and Current. An RLC series circuit has a resistor, a 3.00 mH inductor, and a capacitor. (a) Find the circuit's impedance at 60.0 Hz and 10.0 kHz, noting that these frequencies and the values for and are the same as in Chapter 23.11 Example 1 and Chapter 23.11 Example 2. (b) If the voltage source has, what is at each frequency?

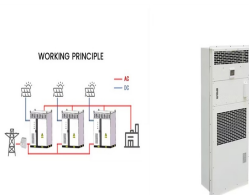
# WHOSE ENERGY STORAGE COMPONENT IS RLC



A 2nd Order RLC Circuit incorporate two energy storage elements. An RLC electrical circuit consisting of a resistor (R), an inductor (L), and a capacitor (C) arranged either in series or in parallel. The circuit's name originates from the letters used to ???



The electric fields surrounding each capacitor will be half the intensity, and therefore store one quarter the energy. Two capacitors, each storing one quarter the energy, give half the total energy storage. Since capacitance is inversely related to energy storage, this implies that identical capacitances in parallel give double the capacitance.



Download PDF Abstract: It is a significant and longstanding puzzle that the resistor, inductor, capacitor (RLC) networks obtained by the established RLC realization procedures appear highly non-minimal from the perspective of linear systems theory. Specifically, each of these networks contains significantly more energy storage elements than the McMillan ???



A well-designed BMS is a vital battery energy storage system component and ensures the safety and longevity of the battery in any lithium BESS. The below picture shows a three-tiered battery management system. This BMS includes a first-level system main controller MBMS, a second-level battery string management module SBMS, and a third-level



and energy storage are analogous to the inertia and energy storage of a mass-spring combination, which you studied in mechanics. In a mechanical system is "driven" by a periodic external force whose frequency matches the natural 2 Components Needed In addition to the laptop, you will need the following components:

# WHOSE ENERGY STORAGE COMPONENT IS RLC



Circuit Laws. In your circuits classes you will study the Kirchhoff laws that govern the low frequency behavior of circuits built from resistors (R), inductors (L), and capacitors (C). In your study you will learn that the voltage dropped across a resistor is related to the current that flows through it by the equation



Figure 1 Sinusoidal voltage source The sine function is periodic in time. This means that the value of the voltage at time  $t$  will be exactly the same at a later time  $t + T$  where  $T$  is the period. The frequency,  $f$ , is defined to be the reciprocal of the period,  $f = 1/T$ . The units of frequency are inverse seconds,  $s^{-1}$ , which are called hertz [Hz].



Each RPFG network contains more than twice as many energy storage elements as the McMillan degree of its impedance, yet it has never been established if all of these energy storage ???



The shock absorber damps the motion and dissipates energy, analogous to the resistance in an RLC circuit. The mass and spring determine the resonant frequency. A pure LC circuit with negligible resistance oscillates at  $(f_0)$ , the same resonant frequency as an RLC circuit.



Calculate the active power (P), reactive power (Q), and apparent power (S) of the RLC series circuit. By finding "the magnitude (V) of the power supply voltage", "the magnitude (I) of the current flowing in the RLC series circuit", and "the power factor ( $\cos\theta$ ) of the RLC series circuit," the active power (P), reactive power (Q), and apparent power (S) can be calculated.





K. Webb ENGR 202 3 Second-Order Circuits Order of a circuit (or system of any kind) Number of independent energy -storage elements Order of the differential equation describing the system Second-order circuits Two energy-storage elements Described by second -order differential equations We will primarily be concerned with second- order RLC circuits

# WHOSE ENERGY STORAGE COMPONENT IS RLC



## RLC Circuit Response and Analysis (Using State Space Method)

Mohazzab1 JAVED, Hussain 1 AFTAB, where their RLC components can be evenly distributed or variously valued. The main features include simplicity and equal to the number of independent energy storage elements in the system. The values of the state variables



Note, however, that the energy storage and energy transfer between reactive components occurs only when there is an energy input at the resonance frequency. Takeaways of Determining Resonance Frequency. When a series-connected RLC circuit has the frequency of its alternating supply voltage varied,  $X_L = X_C$  at a particular frequency. The two



For the RLC circuit shown, the switch is initially in the open position and closes at time  $t = 0$ . The component values are  $R=15\text{k}\Omega$ ,  $L = 500\text{mH}$ ,  $C = 10\text{nF}$ , and the source current is  $I_s = 14\text{mA}$ . Assuming there is no initial energy in either the capacitor or the inductor (at time  $t = -0$ ), find the value of the capacitor voltage  $V_c(t)$  at time  $t = 39\mu\text{s}$ .